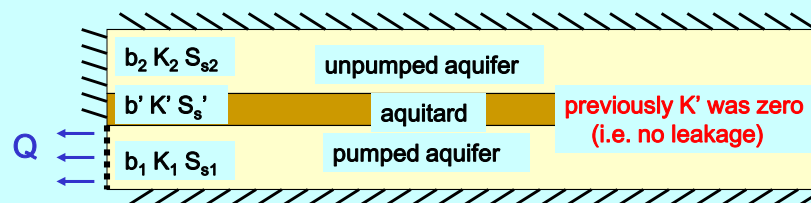


Points deducted -43.3    Points earned 56.7 / 100    Scaled Score +25  
81.7

Average = 81.7		#students	%students	
A	>90	16	33	
B	80-90	8	17	50
C	70-80	12	25	
D	60-70	5	10	
F	50-60	4	8	
F	<50	3	6	

EXAM and KEYS are on the class web page  
Let's review that now

### Leaky Aquifers



subscript 1 = pumped zone  
subscript 2 = unpumped aquifer  
prime = aquitard  
Q = pumping rate  
b = thickness  
K = hydraulic conductivity  
S<sub>s</sub> = specific storage

assume:  
no head change in unpumped aquifer  
horizontal flow in aquifers  
vertical flow in aquitards  
aquifer extends far enough to  
intercept enough leakage to satisfy Q  
These assumptions  
(other than impermeable aquitard) apply

What conditions justify assuming no head change in the unpumped aquifer?

A sufficiently permeable unpumped aquifer so flow to the "disk" above the drawdown cone is low enough to require nearly zero gradient.

What will happen that did not occur in the completely confined aquifer?  
Vertical leakage, first from storage in the aquitard, then from the shallow aquifer.

What do we expect regarding the magnitude of leakage?  
Greatest leakage where head difference is largest, decreasing away from the well.

What will be the maximum extent of drawdown?  
Drawdown will be limited to the radius at which the entire Q leaks from the upper aquifer to the lower.

What controls the rate of drawdown cone development?  
S & T of aquifer  
AND  
S and Kv of the aquitard

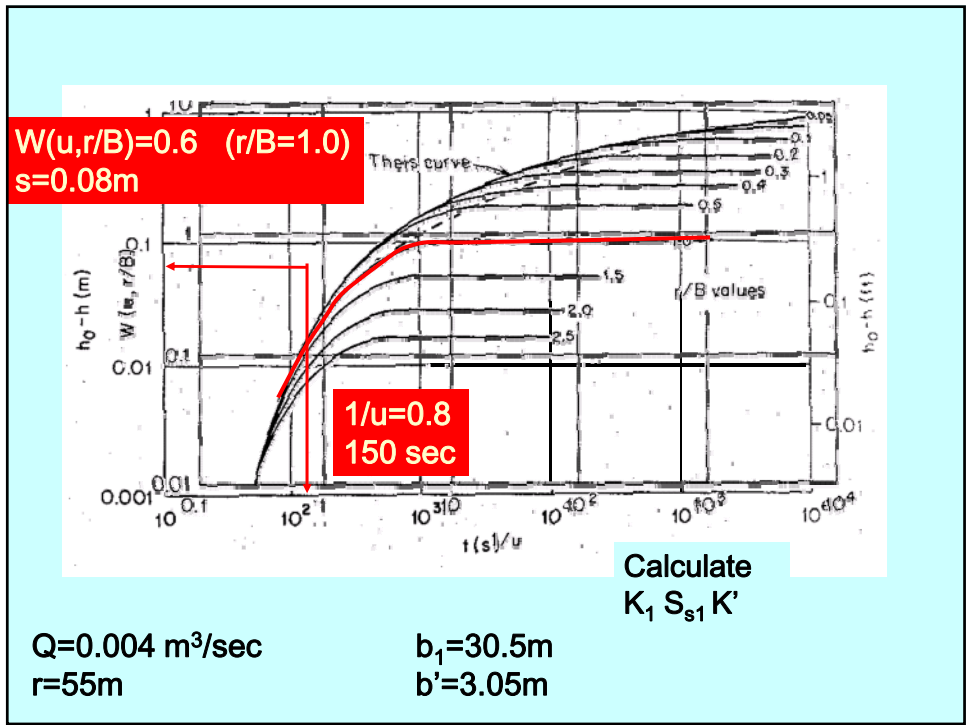
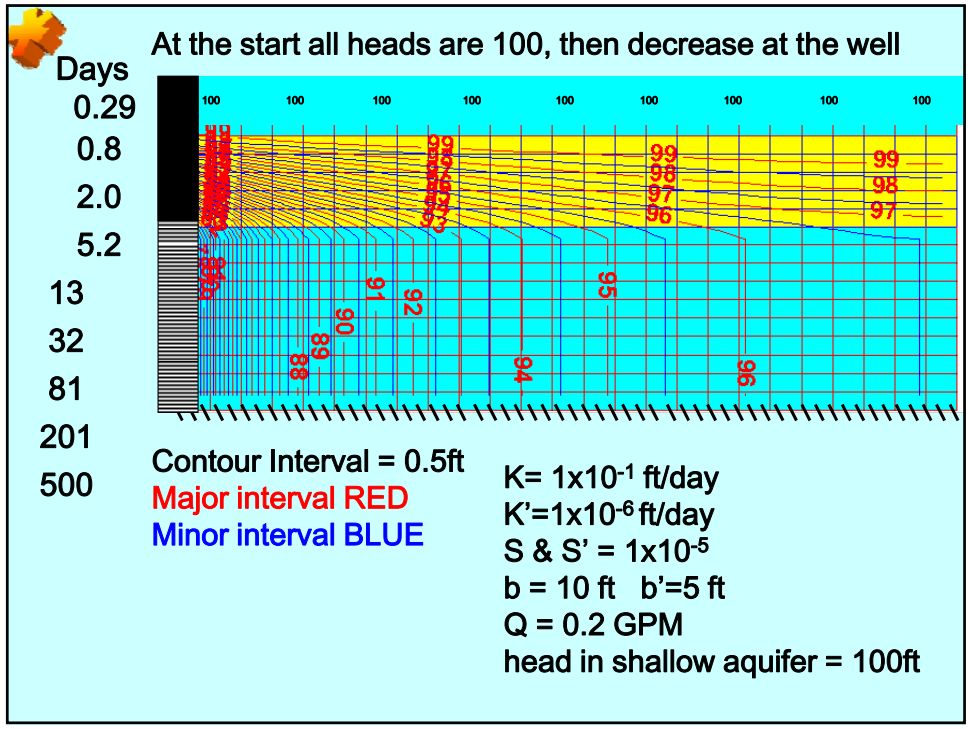
Will drawdown vs time at the red observation well look more like? .....

log s drawdown

C is the right answer

log time

B  
A infinite aquifer  
C  
D none of the above





$$Q=0.004 \text{ m}^3/\text{sec}$$

$$b_1=30.5\text{m}$$

$$r=55\text{m}$$

$$b'=3.05\text{m}$$

$$W(u,r/b)=0.6 \quad (r/B=1.0) \quad 1/u=0.8 \quad u=1.25$$

$$s=0.08\text{m}$$

$$150 \text{ sec}$$

$$s=h_o-h=\frac{Q}{4\pi T}W(u,r/B)$$

$$T = \frac{0.004 \text{ m}^3/\text{sec} \cdot 0.6}{4 * 3.1416 * 0.08\text{m}} = 2.4 \times 10^{-3} \text{ m}^2/\text{sec}$$

$$u = \frac{r^2 S}{4 T t}$$

$$\frac{r}{B} = r \sqrt{\frac{K'}{K_1 b_1 b'}}$$

$$K_1 = T/b = 7.8 \times 10^{-5} \text{ m/sec}$$

$$K' = (1/55\text{m})^2 * 7.8 \times 10^{-5} \text{ m/sec} * 30.5\text{m} * 3.05\text{m} = 2.4 \times 10^{-6} \text{ m/sec}$$

$$S = (1.25 * 4 * 2.4 \times 10^{-3} \text{ m}^2/\text{sec} * 150\text{sec}) / (55\text{m})^2 = 6 \times 10^{-4}$$

$$S_s = S/b = 2 \times 10^{-5} \text{ m}^{-1}$$