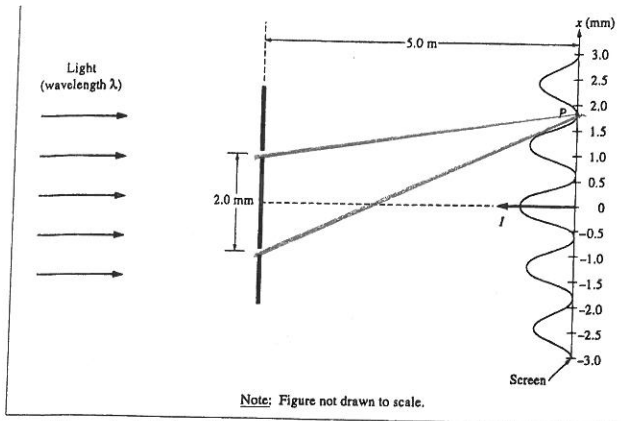


2.



Coherent monochromatic light of wavelength λ in air is incident on two narrow slits, the centers of which are 2.0 mm apart, as shown above. The interference pattern observed on a screen 5.0 m away is represented in the figure by the graph of light intensity I as a function of position x on the screen.

- a. At point P in the diagram, there is a minimum in the interference pattern. Determine the path difference between the light arriving at this point from the two slits.

$$L_a = \sqrt{5^2 + 0.008^2} = 5.00000064 \text{ m}$$

$$L_b = \sqrt{5^2 + 0.008^2} = 5.000000784 \text{ m}$$

$$\Delta L = 7.2 \cdot 10^{-7} \text{ m}$$

- b. Determine the wavelength, λ , of the light.

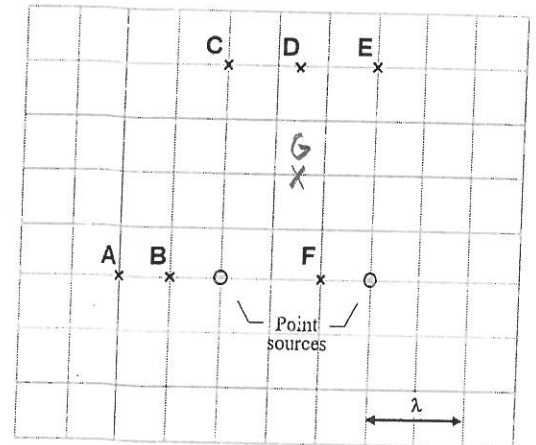
$$\Delta L = 1.5\lambda$$

$$\lambda = \frac{7.2 \cdot 10^{-7} \text{ m}}{1.5} = 480 \text{ nm}$$

3. Shown is a situation where two point sources are generating waves with the same frequency and amplitude. The two sources are in phase with each other. A distance equal to one and a half times the wavelength, 1.5λ , of the waves, separates the two sources.

- a) List all the labeled points above that have constructive interference. If there are no such points, indicate that by stating "none of them."

D



- b) List all the labeled points above that have destructive interference. If there are no such points, indicate that by stating "none of them."

A, B, C, E, F

- c) Draw a point G where another constructive interference point will be.

4. A grating has 3500 lines/cm. How many complete spectral orders (rainbows ranging from 400 nm – 700 nm) can be seen when the grating is illuminated with white light? (4)

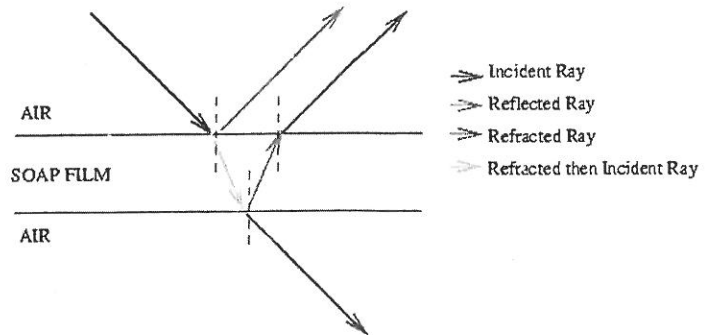
$$d = \frac{1}{3500} \text{ cm} \\ = 2.86 \cdot 10^{-6} \text{ m}$$

what m value for red @ 700 nm?

$$2.86 \cdot 10^{-6} \sin(90) = m(700 \cdot 10^{-9})$$

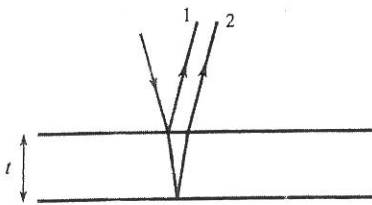
$m = 4.08 \therefore$ can see all of 4 but not 5

When you look at the underside of a DVD, it looks like a rainbow. This is due to the interference of the light and because different colors have different wavelengths, you see certain colors at one angle and different colors at other angles. A similar thing happens when looking at soap bubbles, or an oil spill in a puddle. Pretty much, if you see a shifting rainbow effect, interference is going on.



This is called "Thin film interference". When light strikes a surface, like a soap bubble, some of the light reflects and some refracts and then reflects. The result is 2 waves leaving the material that can constructively or destructively interfere.

5. If an oil spill has a thickness of t , how does the thickness compare to λ if constructive interference occurs? Create an equation with t and λ .



Wave 1 gets offset by $\frac{\lambda}{2} \therefore$ for constructive interference we need $2t = (m + \frac{1}{2})\lambda$

$$2t = (m + \frac{1}{2})\lambda$$

$$t = (m + \frac{1}{2})\frac{\lambda}{2}$$

6. If the oil spill above has a thickness of $1.625 \mu\text{m}$ (micro is 10^{-6}) when red light of wavelength 650 nm shines on it, do I see red light coming back?

$$2t = 3.204 \cdot 10^{-6} = (m + \frac{1}{2})(650 \cdot 10^{-9})$$

$m \approx 4.5 \therefore$ no, you get destructive interference.

7. A possible way to make planes invisible to radar is to coat them with an antireflective polymer. If radar waves have a wavelength of 3.00 cm, how thick does the coating need to be to ensure that no waves come off the plane (or the waves coming off the plane destructively interfere)?

Wave 1 offset by $\frac{\lambda}{2} \therefore$ wave 2 needs to be offset by $m\lambda$ where m is integer

$$2t = m\lambda \\ 2t = 1(3 \text{ cm})$$

$$t = 1.5 \text{ cm} \\ t_{\text{min}}$$